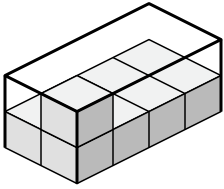


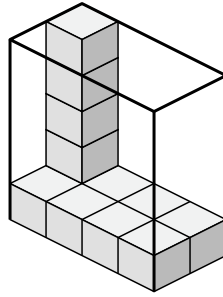


Create an expression to determine the volume of each box.

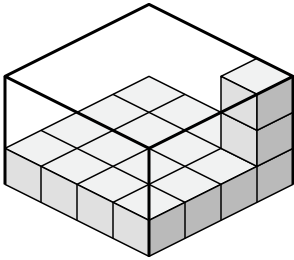
1)



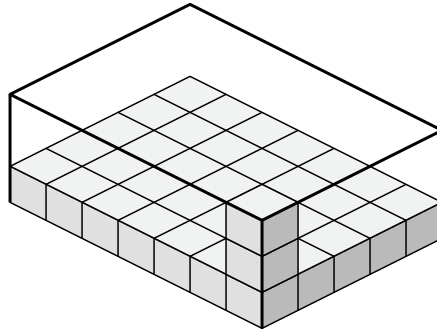
2)



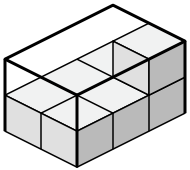
3)



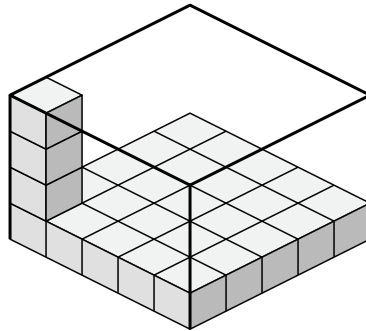
4)



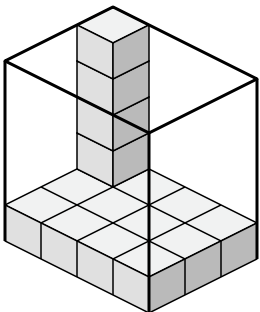
5)



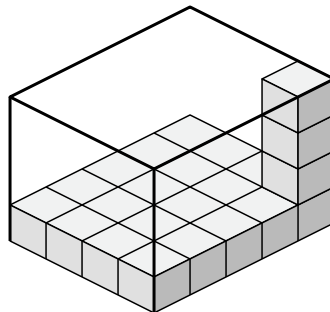
6)



7)



8)



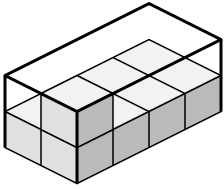
Answers

- 1. _____
- 2. _____
- 3. _____
- 4. _____
- 5. _____
- 6. _____
- 7. _____
- 8. _____

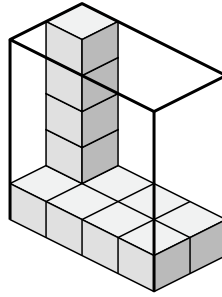


Create an expression to determine the volume of each box.

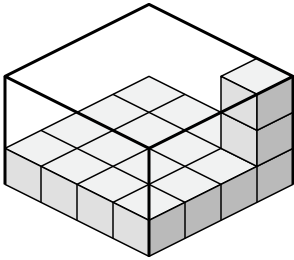
1)



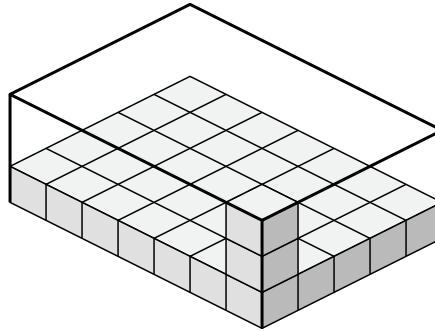
2)



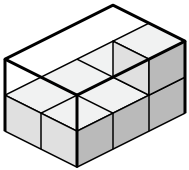
3)



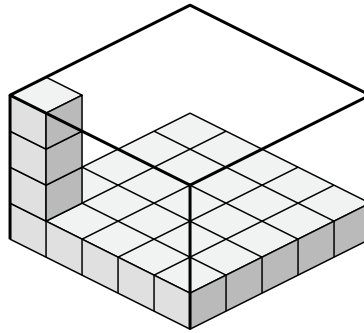
4)



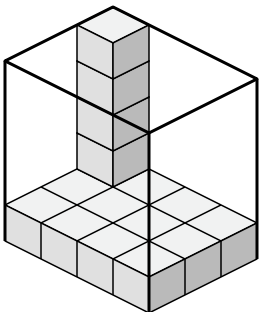
5)



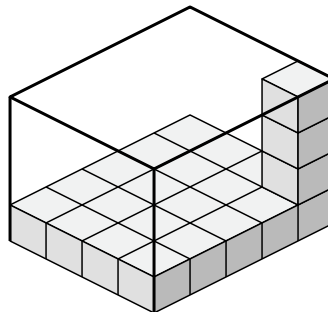
6)



7)



8)



Answers

1. $2 \times 4 \times 2$

2. $4 \times 2 \times 5$

3. $4 \times 4 \times 3$

4. $7 \times 5 \times 3$

5. $2 \times 3 \times 2$

6. $5 \times 5 \times 4$

7. $4 \times 3 \times 5$

8. $4 \times 5 \times 4$